

Title

Characters

Setting

Name







First...

Next...

Last...

Animal Fact and Opinion

Directions: Read each box. Decide if it is a fact or opinion.
Color, cut and paste on the FACT vs OPINION chart.

 <p>Monkeys are cute.</p>	 <p>Penguins lay eggs.</p>	 <p>Tigers have stripes to help them hide.</p>
 <p>Giraffes look silly.</p>	 <p>Elephants have trunks.</p>	 <p>Lions are amazing.</p>

FACT


Something that is true and can be proven.

OPINION

How someone feels or thinks.

Animal Fact and Opinion

Draw a picture of your favorite animal in the box.




Write one fact about your animal.

Write one opinion about your animal.

Birthday Cake

Kate turned six
and wanted a cake.
She asked her dad
to teach her to bake.

She grabbed the bowl
and started to make
a big and yummy
frosted birthday cake!



Write 3 a_e words from the poem.

Real or Pretend Words

Read the words. Circle the real words.

same	zate	wave
gate	make	shade
game	cape	cake
sape	mave	rake

How many real words did you find? _____

The Cat

I had a cat
that sat on a mat.
He sat and sat
on that mat.

That cat that sat and sat
had on a hat as he sat and sat
on that mat.



Write 3 short a words from the poem.

Real or Pretend Words

Read the words. Circle the real words.

map	fat	nap
hat	fam	pat
bat	tap	rat
chat	wap	bap

How many real words did you find? _____



1 - 20 Number Cards

1

2

3

4

5

6

7

8

9

10

11

12

13

14

15

16

17

18

19

20

1	2	3	4	5	6	7	8	9	10
11	12	13	14	15	16	17	18	19	20
21	22	23	24	25	26	27	28	29	30
31	32	33	34	35	36	37	38	39	40
41	42	43	44	45	46	47	48	49	50
51	52	53	54	55	56	57	58	59	60
61	62	63	64	65	66	67	68	69	70
71	72	73	74	75	76	77	78	79	80
81	82	83	84	85	86	87	88	89	90
91	92	93	94	95	96	97	98	99	100



1 Minute Math

Addition

Score: _____

Date: _____

See how many of the following addition problems you can solve in 1 minute.

$$\begin{array}{r} 3 \\ + 5 \\ \hline \end{array}$$

$$\begin{array}{r} 1 \\ + 4 \\ \hline \end{array}$$

$$\begin{array}{r} 7 \\ + 7 \\ \hline \end{array}$$

$$\begin{array}{r} 8 \\ + 3 \\ \hline \end{array}$$

$$\begin{array}{r} 4 \\ + 5 \\ \hline \end{array}$$

$$\begin{array}{r} 9 \\ + 0 \\ \hline \end{array}$$

$$\begin{array}{r} 4 \\ + 2 \\ \hline \end{array}$$

$$\begin{array}{r} 7 \\ + 5 \\ \hline \end{array}$$

$$\begin{array}{r} 0 \\ + 6 \\ \hline \end{array}$$

$$\begin{array}{r} 3 \\ + 6 \\ \hline \end{array}$$

$$\begin{array}{r} 5 \\ + 5 \\ \hline \end{array}$$

$$\begin{array}{r} 2 \\ + 7 \\ \hline \end{array}$$

$$\begin{array}{r} 9 \\ + 1 \\ \hline \end{array}$$

$$\begin{array}{r} 4 \\ + 4 \\ \hline \end{array}$$

$$\begin{array}{r} 8 \\ + 5 \\ \hline \end{array}$$

$$\begin{array}{r} 2 \\ + 2 \\ \hline \end{array}$$

$$\begin{array}{r} 6 \\ + 7 \\ \hline \end{array}$$

$$\begin{array}{r} 4 \\ + 3 \\ \hline \end{array}$$

$$\begin{array}{r} 6 \\ + 6 \\ \hline \end{array}$$

$$\begin{array}{r} 3 \\ + 7 \\ \hline \end{array}$$

$$\begin{array}{r} 8 \\ + 9 \\ \hline \end{array}$$

$$\begin{array}{r} 1 \\ + 5 \\ \hline \end{array}$$

$$\begin{array}{r} 3 \\ + 2 \\ \hline \end{array}$$

$$\begin{array}{r} 7 \\ + 8 \\ \hline \end{array}$$

$$\begin{array}{r} 5 \\ + 0 \\ \hline \end{array}$$

$$\begin{array}{r} 6 \\ + 2 \\ \hline \end{array}$$

$$\begin{array}{r} 7 \\ + 9 \\ \hline \end{array}$$

$$\begin{array}{r} 4 \\ + 0 \\ \hline \end{array}$$

$$\begin{array}{r} 3 \\ + 3 \\ \hline \end{array}$$

$$\begin{array}{r} 8 \\ + 4 \\ \hline \end{array}$$

$$\begin{array}{r} 2 \\ + 5 \\ \hline \end{array}$$

$$\begin{array}{r} 9 \\ + 9 \\ \hline \end{array}$$

$$\begin{array}{r} 6 \\ + 4 \\ \hline \end{array}$$

$$\begin{array}{r} 0 \\ + 3 \\ \hline \end{array}$$

$$\begin{array}{r} 7 \\ + 5 \\ \hline \end{array}$$

$$\begin{array}{r} 8 \\ + 0 \\ \hline \end{array}$$

$$\begin{array}{r} 1 \\ + 1 \\ \hline \end{array}$$

$$\begin{array}{r} 5 \\ + 6 \\ \hline \end{array}$$

$$\begin{array}{r} 0 \\ + 0 \\ \hline \end{array}$$

$$\begin{array}{r} 4 \\ + 9 \\ \hline \end{array}$$

$$\begin{array}{r} 8 \\ + 8 \\ \hline \end{array}$$

$$\begin{array}{r} 3 \\ + 2 \\ \hline \end{array}$$

$$\begin{array}{r} 9 \\ + 3 \\ \hline \end{array}$$

$$\begin{array}{r} 1 \\ + 6 \\ \hline \end{array}$$

$$\begin{array}{r} 7 \\ + 4 \\ \hline \end{array}$$

$$\begin{array}{r} 9 \\ + 2 \\ \hline \end{array}$$

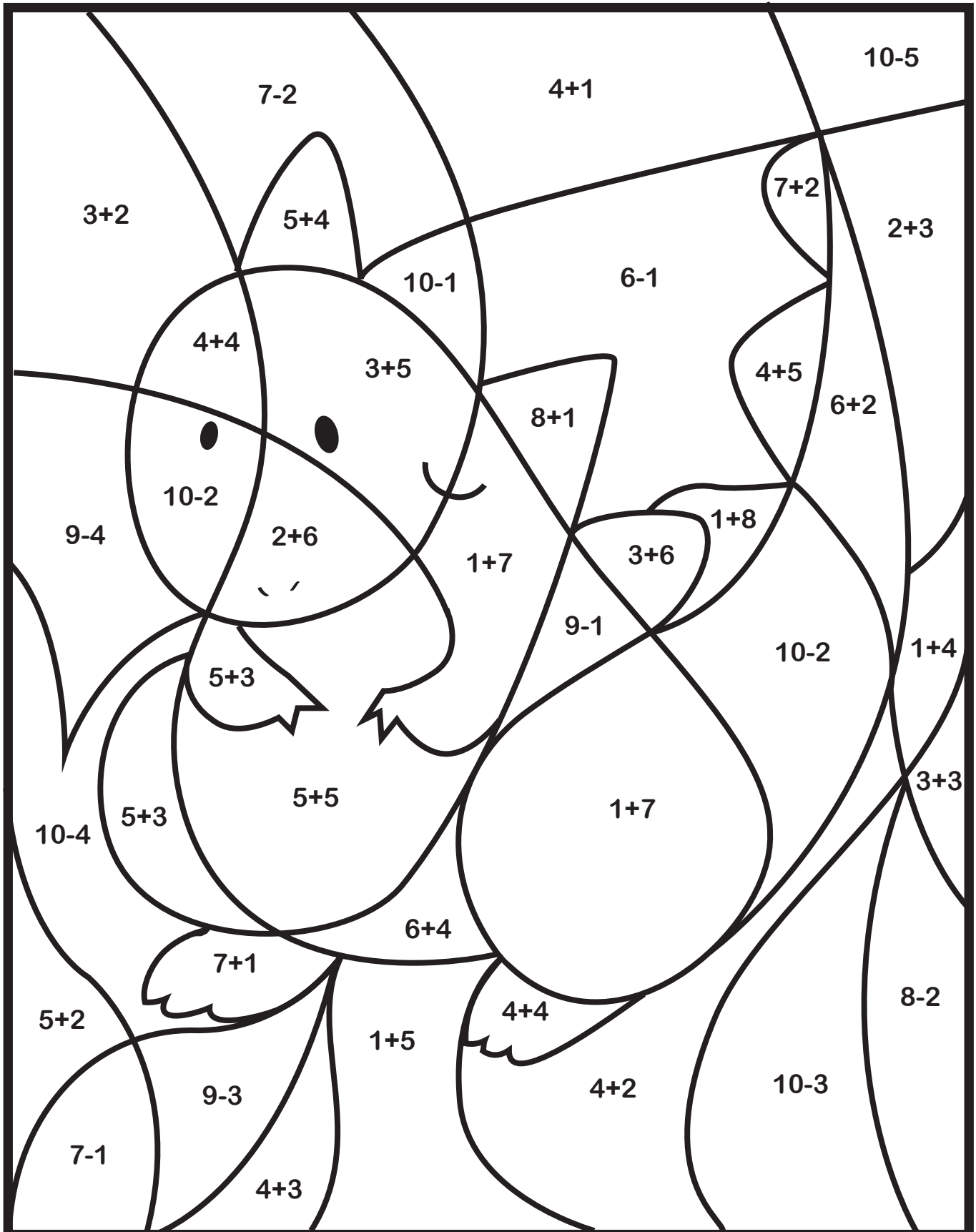
$$\begin{array}{r} 6 \\ + 6 \\ \hline \end{array}$$

$$\begin{array}{r} 2 \\ + 2 \\ \hline \end{array}$$

COLOR BY NUMBER

Solve the following problems. Color based on the answers matching to the color key.

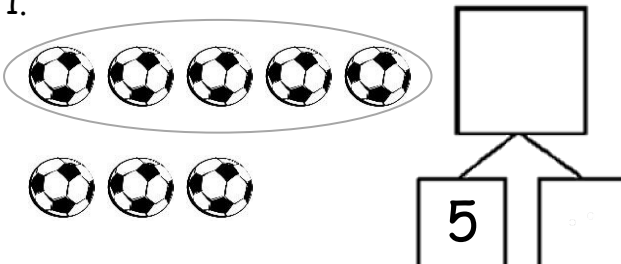


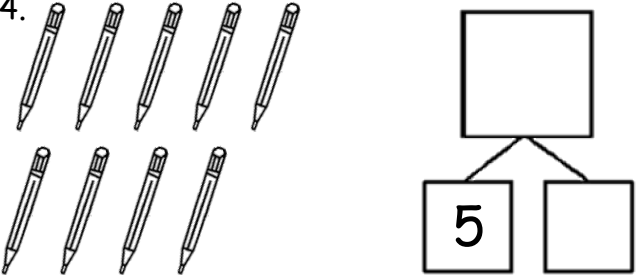
LIGHT BLUE: 5 LIGHT GREEN: 6 GREEN: 7 ORANGE: 8 RED: 9 YELLOW: 10



Name _____

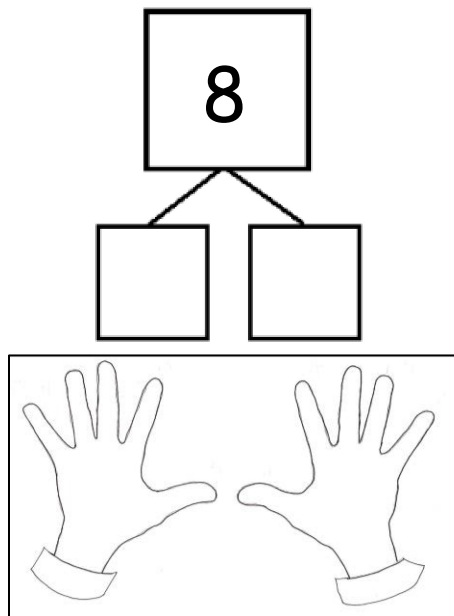
Date _____

Circle 5, and then make a number bond.

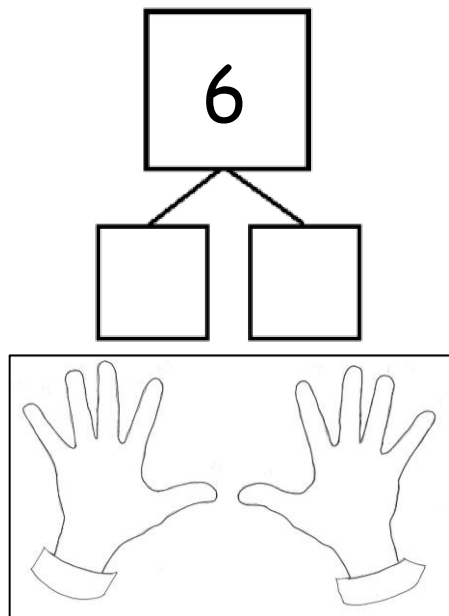
<p>1.</p> 	<p>2.</p> 
<p>3.</p> 	<p>4.</p> 

Put nail polish on the number of fingernails shown from left to right. Then, fill in the parts. Make the number of fingernails on one hand a part.

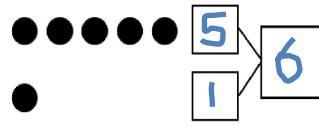
5.



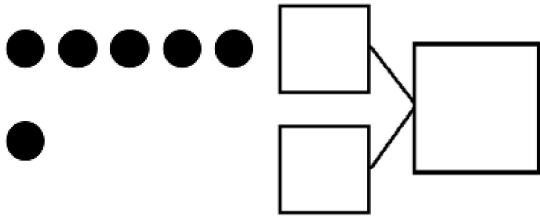
6.



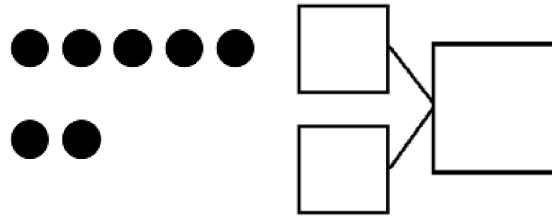
Make a number bond that shows 5 as one part.



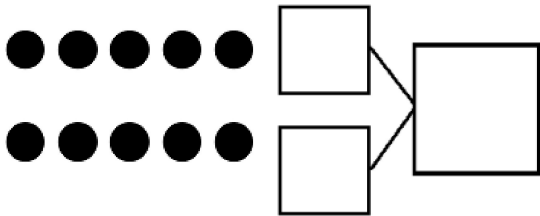
7.



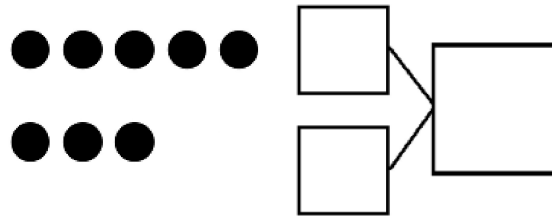
8.



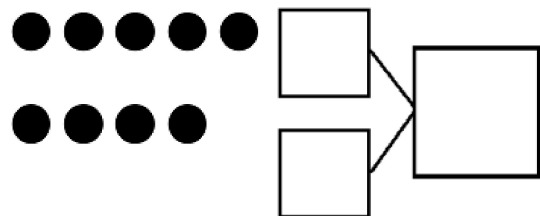
9.



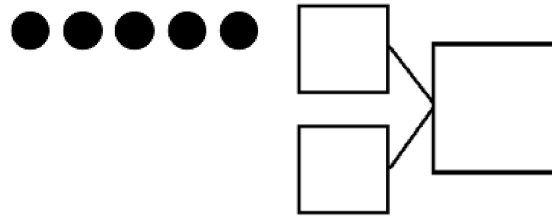
10.



11.




12.



Unit 1

Rules and Laws





Following Rules

Read the paragraph, and then answer the questions.

Victor's class has rules for using the computer. One rule is to finish schoolwork before using the computer. Victor did not follow this rule. The next day, he could not use the computer.



1 What rule did Victor break?

2 What happened because he broke the rule?





3 Why would it have been better for Victor to follow the rule?

Name _____ Date _____

Who Is Obeying the Law?

Color each person who is obeying the law.

Draw an X on each person who is not.




Name _____ Date _____



MAP AND GLOBE SKILLS

Mapping Symbols

Color the pictures in the map key and on the map. Then draw a new symbol in the map key and on the map.



Map Key



house



school



park



store



library



bank



street



stop sign



hospital


Name _____ Date _____

Who Is the Leader?

Draw a line to match each clue with a leader. Then write the name of the leader on the line.

1 I tell a team how to play.

I am a _____



teacher

2 I make sure swimmers follow rules at the pool.


I am a _____



coach

3 I am in charge of a city.

I am a _____



lifeguard

4 I teach a class.

I am a _____



mayor

Government Workers



firefighter



park ranger



librarian









police officer

Write the name of a government worker to complete each sentence.

- _____
- _____
- ① A _____ helps us find books to read.
- _____
- _____
- ② A _____ helps when there is a fire.
- _____
- _____
- ③ A _____ makes sure people follow laws.
- _____
- _____
- ④ A _____ keeps parks safe.

Rights and Responsibilities

Circle right or responsibility under each picture.

<p>1</p>  <p>Go to school.</p> <p>right responsibility</p>	<p>2</p>  <p>Behave and learn.</p> <p>right responsibility</p>
<p>3</p>  <p>Keep your dog on a leash.</p> <p>right responsibility</p>	<p>4</p>  <p>Own a pet.</p> <p>right responsibility</p>
<p>5</p>  <p>Drive a car.</p> <p>right responsibility</p>	<p>6</p>  <p>Obey traffic laws.</p> <p>right responsibility</p>

Name _____ Date _____



Study Guide

Read the paragraph. Use the words in the box to fill in the blanks.

vote	citizen	laws	leader	rules	community
------	---------	------	--------	-------	-----------

People _____ to choose the mayor.

The mayor is the _____ of our city. She helps

make _____ and _____ to keep

us safe. Everyone who lives in our _____
must respect the laws. That is part of being a

good _____.

Name _____

Try It

Read the list. Circle if each thing is a *good* or a *service*.

1. apple



Good Service

2. car wash



Good Service

3. basketball



Good Service

4. backpack



Good Service

5. haircut



Good Service

6. teeth cleaning



Good Service

7. pants



Good Service

8. mail delivery



Good Service

9. teddy bear



Good Service

10. taxi ride



Good Service